









Date: _____

Review Previous Lesson

Drag and drop the correct names of each of the following symbols.

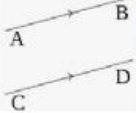
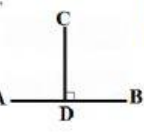

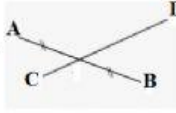


1. 
2. 
3. 
4. 
5. 
6. 
7. 
8. 

- Line
- Point OA
- Line segment AB
- Parallel lines
- Intersecting lines
- Point A
- Ray AB
- Perpendicular lines
- Line AB

Part 1

Part 2

Choose the answer that fills in the gap.

9.  \overleftrightarrow{AB} \overleftrightarrow{CD}
10.  AB CD
11.  X
12.  AB CD at point E.
13.  Ray
14.  AB CD