

FAMILIA DEL 400

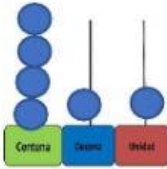
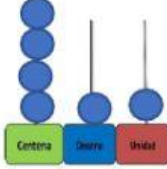
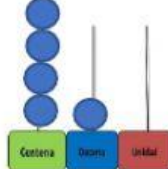
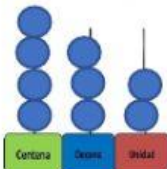
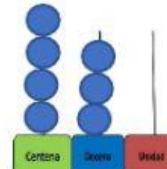
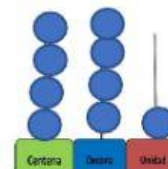


Completa los números que faltan

400		402		404	405	406		408	409
	411		413	414		416	417		
420	421		423	424		426	427	428	
	431	432		434	435	436			439
440		442	443	444	445		447	448	449
450		452	453	454	455	456	457	458	460



Escribe el número que representa cada ábaco y ubica el operador comparativo que corresponde $<$, $>$ o $=$

 <input type="text"/>	<input type="text"/>	 <input type="text"/>	<input type="text"/>	 <input type="text"/>
 <input type="text"/>	<input type="text"/>	 <input type="text"/>	<input type="text"/>	 <input type="text"/>

Realizado por: MSc. Alexandra Angulo