

Units of Length: inches, feet, and yards

Fill in the proper unit (inches, feet, or yards) for each of the measurements below.



The length of the school bus:

35 _____




The height of the maple tree:

12 _____




The length of the notebook:

15 _____



The height of the elephant:

36 _____



The length of the football field:

100 _____



The length of the pencil case:

12 _____




The height of the house:

25 _____



The length of the pencil:

6 _____



The length of the running track:

440 _____