

Activity 3

Colour the answer. Complete the number sentence.

a

$$14 - 7 = \square$$

6

7

b

$$11 - 3 = \square$$

9

8

c

$$18 - 9 = \square$$

9

10

d

$$15 - 6 = \square$$

11

9

e

$$\square = 11 - 8$$

3

4

f

$$\square = 16 - 8$$

8

9

g

$$5 = 12 - \square$$

7

8

h

$$\square - 6 = 6$$

0

12

i

$$\square - 6 = 7$$

12

13

j

$$\square - 8 = 9$$

17


15

EASY SUBTRACTION

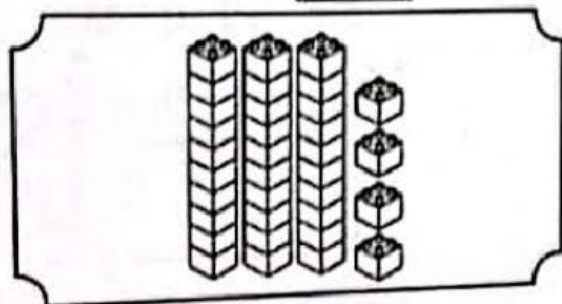
Activity 1

1 Cross (X) the objects that you subtract. Write the answer.


a $26 - 4 = \square$



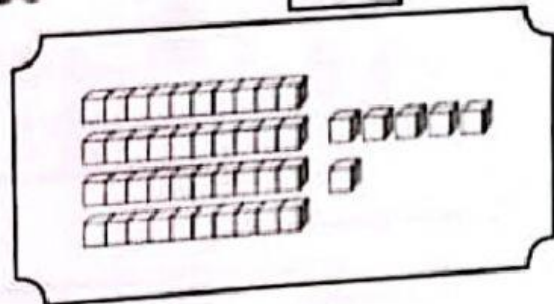
b $34 - 3 = \square$



c $48 - 5 = \square$



d $46 - 2 = \square$



2 Calculate.

a $19 - 7 = \square$

$$\begin{array}{r} 19 \\ - 7 \\ \hline \end{array}$$

c $36 - 2 = \square$

b $28 - 3 = \square$

d $59 - 6 = \square$

