

Name: _____

Class: _____

Doubles and halves



Double 4 is _____

Half of 4 is _____



Double 6 is _____

Half of 6 is _____




Double 10 is _____

Half of 10 is _____

Name: _____


Class: _____

DOUBLE these things



$2 + 2 = \underline{\quad}$


HALVE these things



Half of 2 is



$3 + 3 = \underline{\quad}$



Half of 4 is




$4 + 4 = \underline{\quad}$



Half of 6 is



$1 + 1 = \underline{\quad}$



Half of 4 is



$5 + 5 = \underline{\quad}$



Half of 8 is