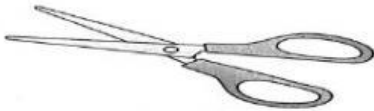
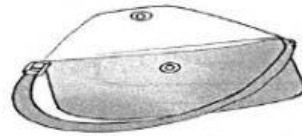


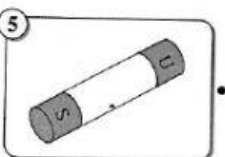
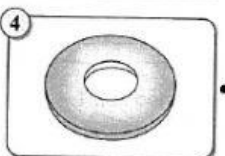
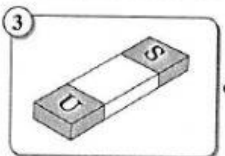

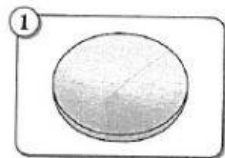
A. Choose objects that use magnets.

*Pilih objek yang menggunakan magnet.*



B. Match the shape of the magnet with its correct name.

*Padankan bentuk magnet dengan namanya yang betul.*



horseshoe magnet

bar magnet

button magnet

cylinder magnet

ring magnet