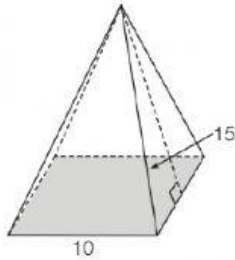


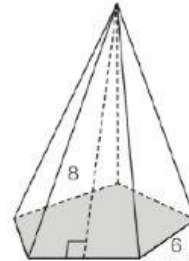
Exercise

1. Find the lateral area of the pyramid.

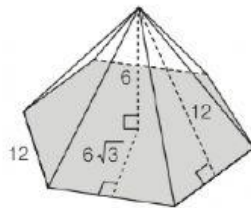
1)



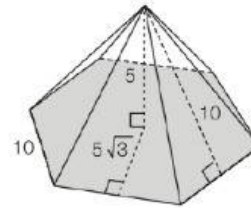
2)



3)

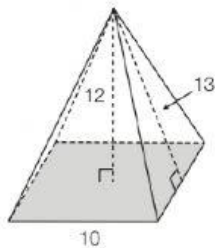


4)



2. Find the lateral area and surface area of the pyramid.

1)



2)

