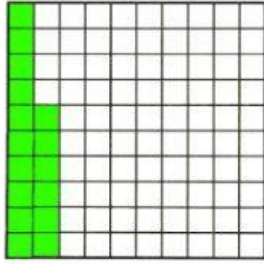



Percentage


State the percentage.



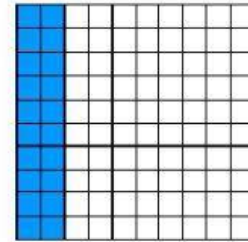
$$\frac{\quad}{100} = \boxed{\quad} \%$$



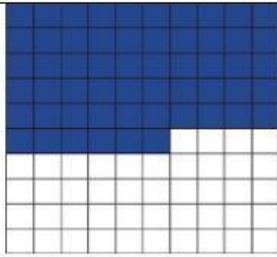
$$\frac{\quad}{100} = \boxed{\quad} \%$$




$$\frac{\quad}{100} = \boxed{\quad} \%$$



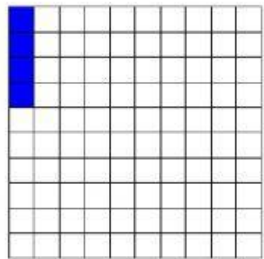
$$\frac{\quad}{100} = \boxed{\quad} \%$$



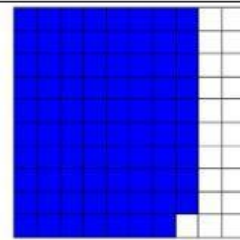
$$\frac{\quad}{100} = \boxed{\quad} \%$$



$$\frac{\quad}{100} = \boxed{\quad} \%$$



$$\frac{\quad}{100} = \boxed{\quad} \%$$



$$\frac{\quad}{100} = \boxed{\quad} \%$$