







# MATEMATIK TAHUN 1

NAMA : \_\_\_\_\_

## TOLAK

Padankan ayat matematik dan gambar dengan betul.

 <input type="text"/>	 <input type="text"/>
 <input type="text"/>	 <input type="text"/>
 <input type="text"/>	 <input type="text"/>

$8 - 1 = 7$

$7 - 2 = 5$

$9 - 3 = 6$

$7 - 4 = 3$

$8 - 4 = 4$

$7 - 3 = 4$

Selesaikan.

$2 - 1 =$ <input type="text"/>	$6 - 3 =$ <input type="text"/>	$8 - 4 =$ <input type="text"/>
$3 - 2 =$ <input type="text"/>	$7 - 2 =$ <input type="text"/>	$9 - 3 =$ <input type="text"/>
$5 - 3 =$ <input type="text"/>	$6 - 5 =$ <input type="text"/>	$8 - 5 =$ <input type="text"/>
$3 - 1 =$ <input type="text"/>	$5 - 2 =$ <input type="text"/>	$6 - 2 =$ <input type="text"/>
$4 - 2 =$ <input type="text"/>	$7 - 5 =$ <input type="text"/>	$9 - 5 =$ <input type="text"/>
$5 - 4 =$ <input type="text"/>	$6 - 4 =$ <input type="text"/>	$8 - 3 =$ <input type="text"/>
$4 - 3 =$ <input type="text"/>	$7 - 6 =$ <input type="text"/>	$9 - 4 =$ <input type="text"/>