



Conclude the factors that affect the bulbs in series and parallel circuits based on the opened switch or closed switch

TP 5

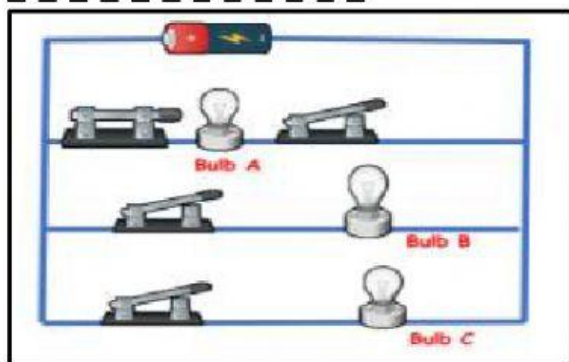
1. Observe and study the condition of switches based on the diagrams given below. State the conditions of the bulbs. Write

lights up

or

does not light up

Circuit 1

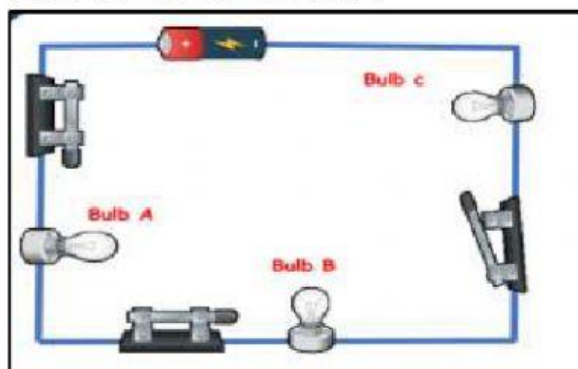


Bulb A

Bulb B

Bulb C

Circuit 2

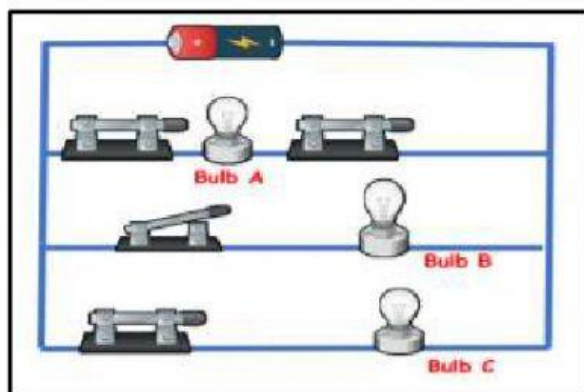


Bulb A

Bulb B

Bulb C

Circuit 3



Bulb A

Bulb B

Bulb C