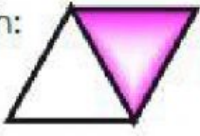

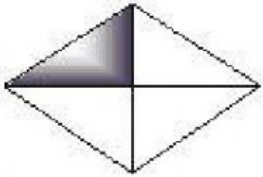



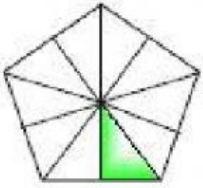

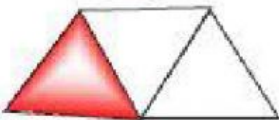

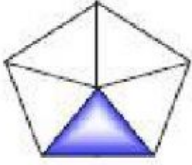



Nama: \_\_\_\_\_

Kelas: \_\_\_\_\_

Tulis dan sebut pecahan yang telah dilorekkan.

Gambar pecahan	Tulis	Sebut
Contoh: 		Satu perdua
1. 		
2. 		
3. 		
4. 		
5. 		

Tandakan (✓) bagi pecahan yang mempunyai nilai yang lebih besar.

1.

$\frac{1}{4}$	
$\frac{1}{2}$	

2.

$\frac{1}{3}$	
$\frac{1}{6}$	

3.

$\frac{1}{9}$	
$\frac{1}{7}$	

4.

$\frac{1}{7}$	
$\frac{1}{10}$	

5.

$\frac{1}{5}$	
$\frac{1}{3}$	

6.

$\frac{1}{8}$	
$\frac{1}{9}$	

7.

$\frac{1}{2}$	
$\frac{1}{6}$	

8.

$\frac{1}{4}$	
$\frac{1}{9}$	