
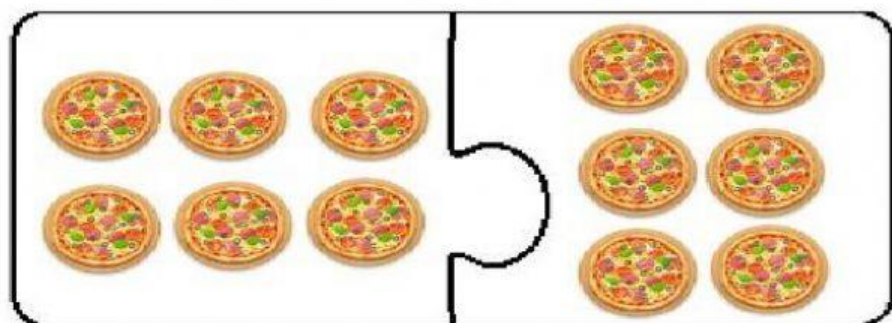


Nama :

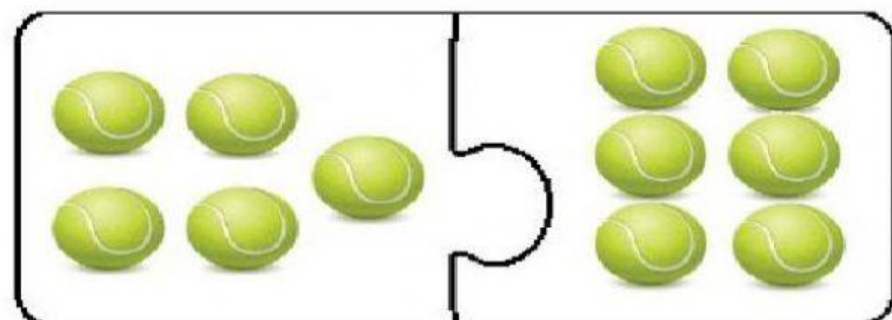
Arahan : Lengkapi



$$9 + 5 = \square$$

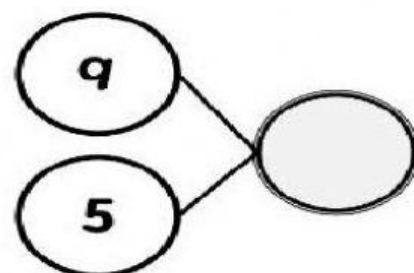


$$6 + 6 = \square$$

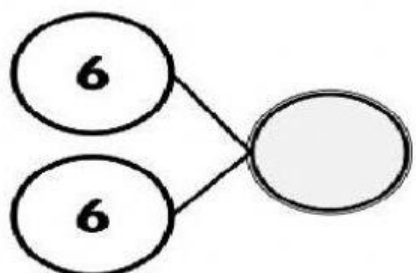


$$5 + 6 = \square$$

$$\begin{array}{r} 9 \\ + 5 \\ \hline \hline \end{array}$$



$$\begin{array}{r} 6 \\ + 6 \\ \hline \hline \end{array}$$



$$\begin{array}{r} 5 \\ + 6 \\ \hline \hline \end{array}$$

