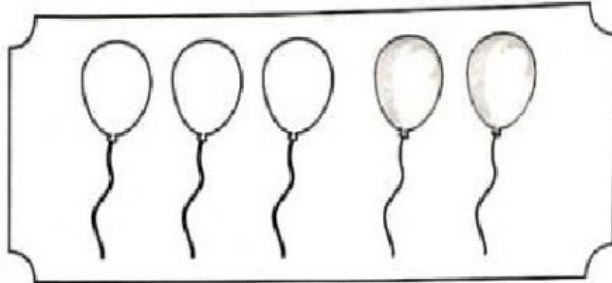


## Mathematics Year 1


### Recognise Addition

A. Fill in the blanks.


a 3 and 2 make .




b 3 add 3 is .




c The sum of 5 and 4 is .



d 1 more than 6 is .





e There are  deers altogether.



**B. Choose the correct answer**

a



There is 1  and 1 .

Balance	Total
---------	-------

is 2.

b



There are 3 big balloons and 3 small balloons. There are 6 balloons 

balance	altogether
---------	------------

.

c



3 girls are playing at the playground. 1 boy is joining them. There are 4 children 

left	altogether
------	------------

.

d



There are 2 rings on the cone. Johan puts another 3 rings. Now, the 

difference	total
------------	-------

 is 5 rings.

e



There are 8 toys in the box. Mia 

adds	removes
------	---------

 4 toys to make it a total of 12.