

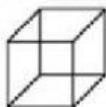
Fluency Challenge 1

Calculate the volume

- 1) Cube of side length 3 cm



- 2) Cube of side length 4 cm



- 3) Cube of side length 1 cm

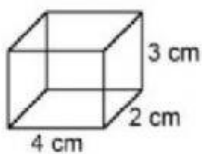


- 4) Cube of side length 1.5 cm

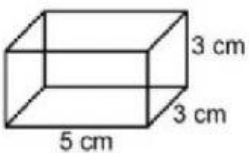


Calculate the volume

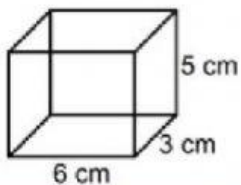
1)



2)

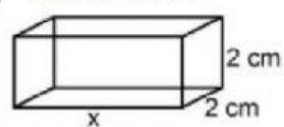


3)

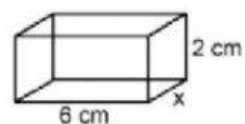


Find x

- 1) Volume = 20 cm^3



- 2) Volume = 36 cm^3



- 3) Volume = 120 cm^3

