
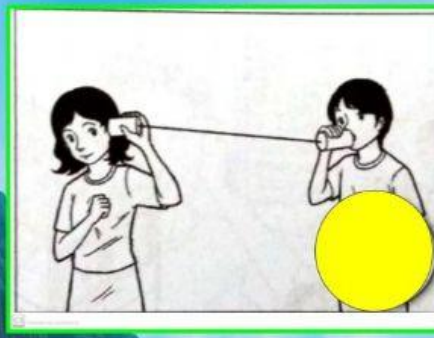
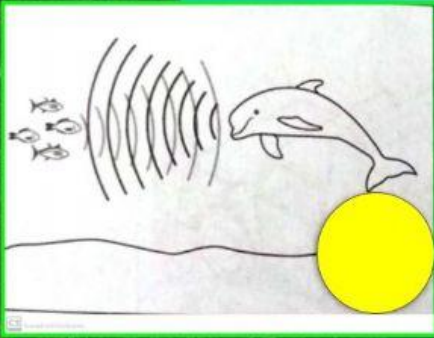


NAME:


CLASS : 4

DATE :

1. Which of the following situation show that sound can be reflected?



2. Based on the diagram below, CHOOSE YES OR NO.



a) The phenomenon is an example of sound can be reflected

b) Sound can be reflected in a vacuum

c) The sound produced cannot be reflected on the cliff wall

d) The man's voice echoed