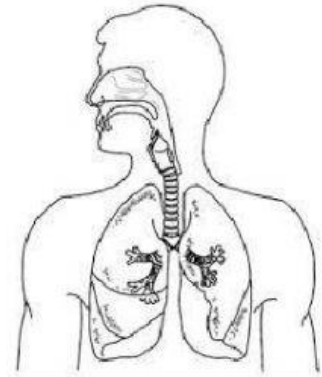
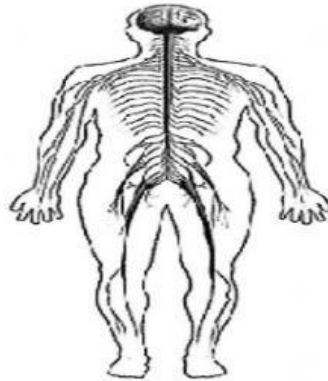
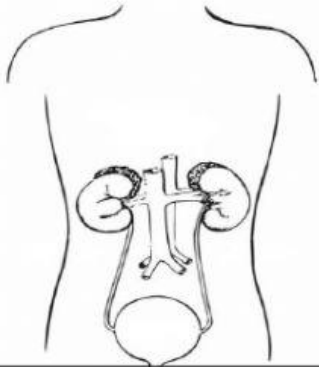


Escribe cual sistema es y su órgano principal.



Sistema:

\_\_\_\_\_

Órgano principal:

\_\_\_\_\_

Sistema:

\_\_\_\_\_

Órgano principal:

\_\_\_\_\_

Sistema:

\_\_\_\_\_


Órgano principal:

\_\_\_\_\_

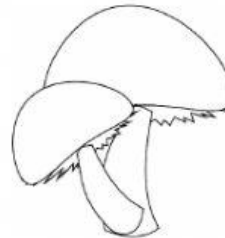
De los siguientes componentes escribe cuales son: consumidor – productor – descomponedor.




\_\_\_\_\_



\_\_\_\_\_



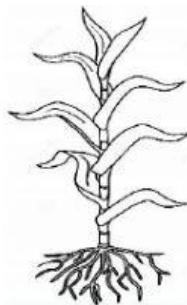
\_\_\_\_\_



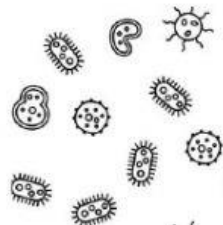
\_\_\_\_\_




\_\_\_\_\_



\_\_\_\_\_



\_\_\_\_\_



\_\_\_\_\_