





## Activity 2/

Complete the number sentences and stories.

a




$$16 \div \square = \square$$

There are 16 buttons.

Each coat has  buttons. There are  coats.

b

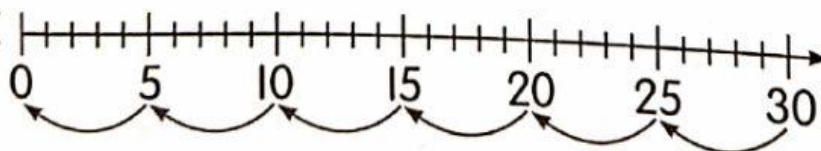


$$9 \div \square = \square$$

There are 9 guavas shared among  children.

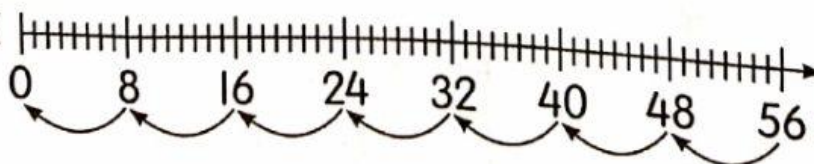
Each child gets .

c



$$\square \div 5 = \square$$

d



$$\square \div \square = \square$$