


## EVALUACIÓN SUMATIVA DE SUSTRACCIONES SIN PEDIR Y PIDIENDO



Nombre: \_\_\_\_\_

### 1. RESUELVE LAS SIGUIENTES SUSTRACCIONES SIN PEDIR


$$\begin{array}{r} 9 \\ - 5 \\ \hline \end{array}$$



$$\begin{array}{r} 7 \\ - 1 \\ \hline \end{array}$$



$$\begin{array}{r} 7 \\ - 2 \\ \hline \end{array}$$



$$\begin{array}{r} 8 \\ - 5 \\ \hline \end{array}$$

