





## Mathematics Test

Answer the following questions to the best of your ability. Read and follow all the instructions carefully.

1. Match the number to the numeral.

One	3
Two	7
Three	10
Four	6
Five	8
Six	1
Seven	9
Eight	4
Nine	2
Ten	5



2. Match the set to the number

			
6		4	
1		2	




3. Fill in the missing part. Type in your answer.

<table border="1" style="margin: auto; border-collapse: collapse;"> <tr> <td colspan="2" style="background-color: #b8cce4; padding: 5px;">10</td> </tr> <tr> <td style="background-color: #ffffcc; padding: 5px; width: 50%;">6</td> <td style="padding: 5px; width: 50%;">?</td> </tr> </table> <p style="text-align: center; margin-top: 10px;"><math>6 + \underline{\quad} = 10</math></p>	10		6	?	<table border="1" style="margin: auto; border-collapse: collapse;"> <tr> <td colspan="2" style="background-color: #b8cce4; padding: 5px;">8</td> </tr> <tr> <td style="background-color: #ffffcc; padding: 5px; width: 50%;">?</td> <td style="padding: 5px; width: 50%;">3</td> </tr> </table> <p style="text-align: center; margin-top: 10px;"><math>\underline{\quad} + 3 = 8</math></p>	8		?	3
10									
6	?								
8									
?	3								

4. Subtract the following. Type in your answer.

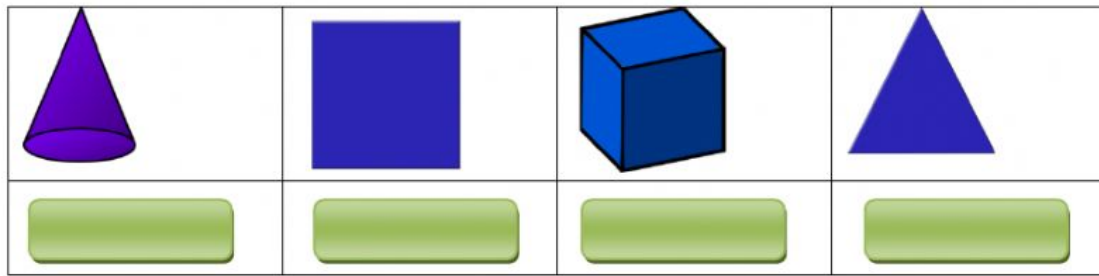
 <p style="margin-top: 10px;"><math>5 - 4 = </math> <input style="width: 50px;" type="text"/></p>	 <p style="margin-top: 10px;"><math>9 - 6 = </math> <input style="width: 50px;" type="text"/></p>
--	---

5. Drag the shape to its name.

			
---	---	--	---

Rectangle	Triangle	Circle	Square




6. Click on the solid shapes and select its name below.



7. Select Trinidad and Tobago money.




8. Match the picture to the correct coin.

	Bird of paradise	10 cent coin
	Hibiscus	5 cent coin
	National flower	25 cent coin

9. Look at the pictograph below and answer the questions.

Students Favourite Lunch



1. How many children enjoy hot dogs? 5 6 7

2. Which food is liked the most?



3. Which food is liked the least?



4. Which foods are like by the same amount of children?



5. How many children like hot dogs and Macaroni pie? 10 9 8