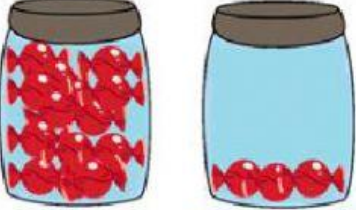

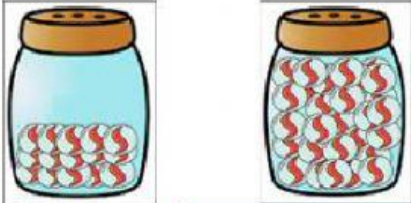



A. Estimate the quantity of the objects. Write "more than" or "less than".

<p>1</p>  <p>15      ..... 15</p>	<p>2</p>  <p>20      ..... 20</p>
<p>3</p>  <p>18      ..... 18</p>	<p>4</p>  <p>100      ..... 100</p>

B. Estimate the quantity of the objects given. Choose the suitable answer.

1.



About 10 grapes

About 40 grapes

2.



About 50 grapes

About 100 grapes

3.



About 60 marbles

About 15 marbles

4.



About 60 marbles

About 15 marbles