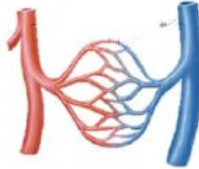
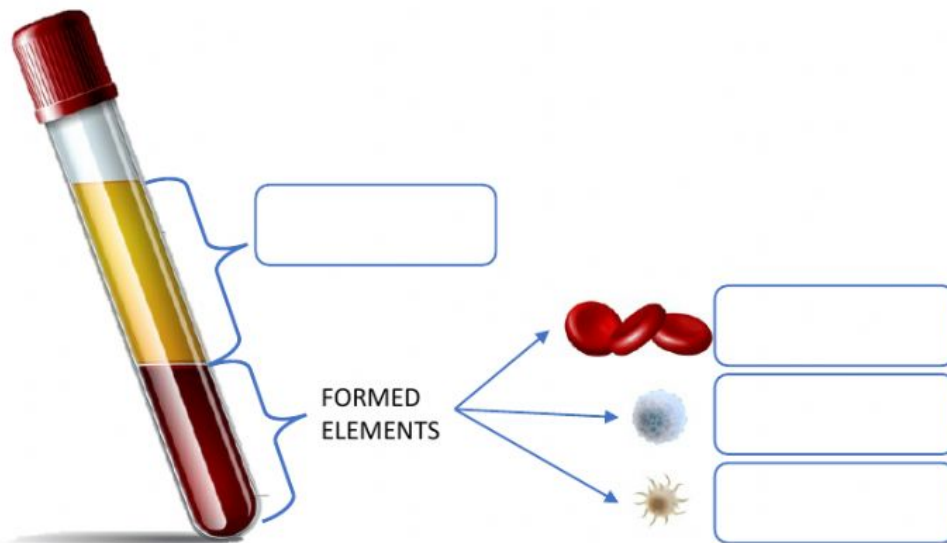


FORMATIVE ACTIVITY "The Circulatory System"

1. Name the 3 components of the Circulatory System:



2. Look at the image and complete the missing information:

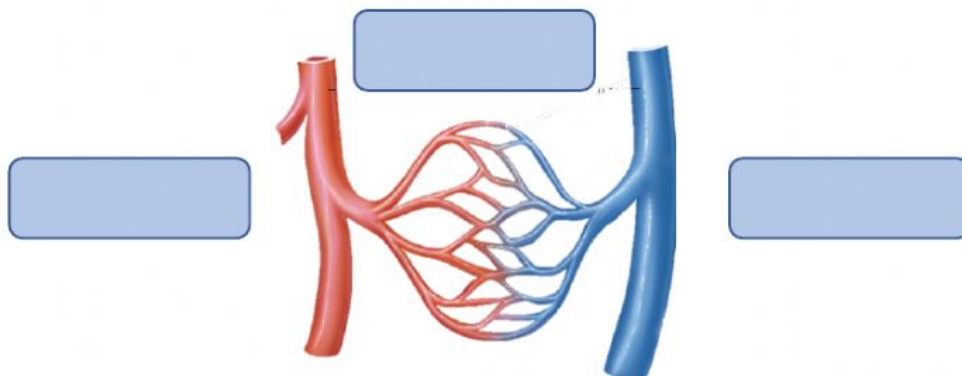


3. Move the words from the word bank to complete the sentences:

illness	plasma	oxygen	coagulation
red	platelets	white	

- a) The blood cells defend the body against .
- b) The help to stop the bleeding. This is called .
- c) The blood cells transport to all the body.
- d) The is the liquid part of the blood.

4. Write the name of the different blood vessels



5. Match the corresponding concept with its function.

Heart	They move blood from the heart to the tissues.
Arteries	Liquid tissue that transports different substances.
Veins	Group of tubes that transport blood through all the body.
Capillaries	Muscular organ that pumps blood to all the body.
Blood Vessels	Thin tubes that help substances to reach the cells.
Blood	They move blood from the tissues to the heart.