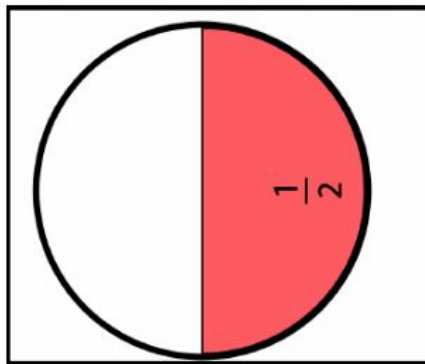
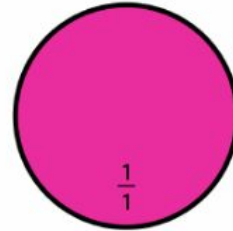


September 2021 Math Pre/Post-Assessment  
Comparing Unit Fractions

Name \_\_\_\_\_

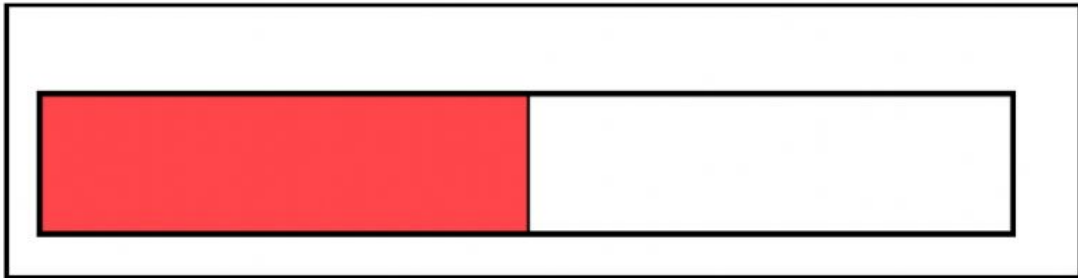
Date \_\_\_\_\_

1. Look at the circle. This is the whole unit.  
Point to the picture that shows a half of this circle.



“ Point to on behalf of the circle”  
“ Where is the picture that shows half of the circle?”

2. Look at the picture. It shows  $\frac{1}{3}$  of a bar. Which fraction is bigger than  $\frac{1}{3}$ ?



“One half is bigger than one third. Point to  $\frac{1}{2}$ ”  
“Do you see a picture that shows one half of the bar?”


3. This is a whole pizza. It is split into 8 slices. Each slice is a fraction of the pizza.  
What is a unit fraction of this pizza?



$$\frac{1}{8}$$

"Point to one slice of pizza"  
"Do you see one/eights of a pizza?"

4. Look at the watermelon slices.  
They are fractions of a whole unit.  
What is the whole unit?



"Point to the whole watermelon."  
"What unit these slices belong to?"