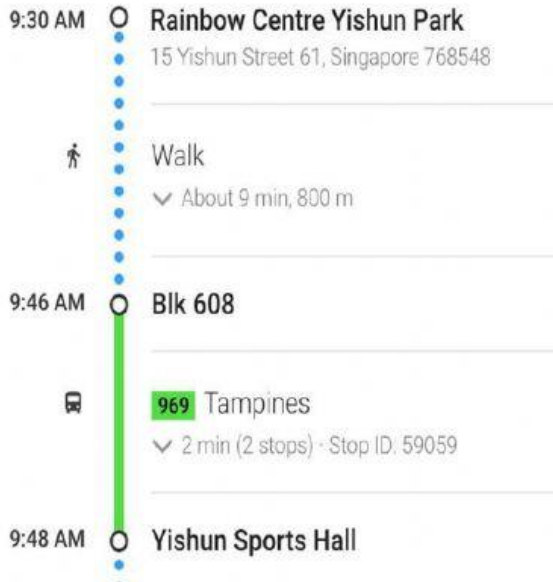


Name: _____

Date: _____

Google Map

a. Using Google Map, complete the following questions.



S3/4B is going to Yishun Stadium for their PD sessions. They will be going there from school.

Their school is Rainbow Centre Yishun Park School.

1. Where does S3/4B wants to go? (Destination)

- a. Northpoint City b. Yishun Stadium

2. Where is S3/4B from? (Starting point)

- a. Home b. Rainbow Centre Yishun Park School

3. What bus number should they take?

- a. Bus 969 b. Bus 812

4. How many stops are there?

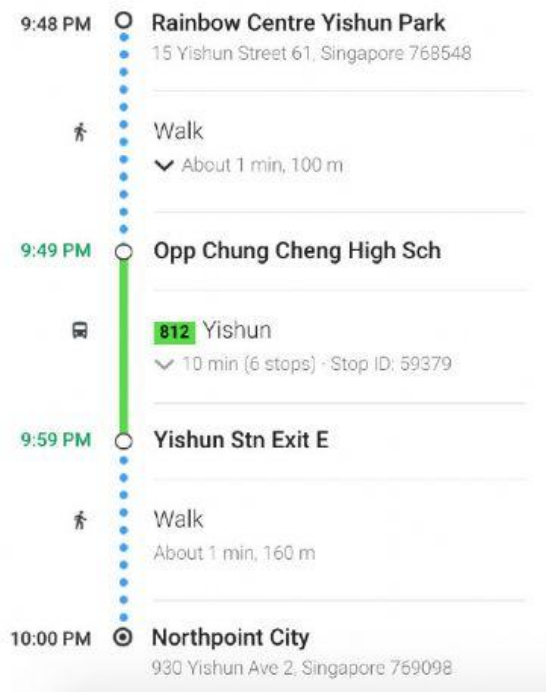
- a. 2 stops b. 5 stops

Name: _____

Date: _____

Google Map

a. Using Google Map, complete the following questions.



Mary wants to go Northpoint City to buy her lunch after school. Her school is at Rainbow Centre Yishun Park School

1. Where does Mary wants to go? (Destination)

- a. Northpoint City b. Wisteria Mall

2. Where is Mary from? (Starting point)

- a. Home b. Rainbow Centre Yishun Park School

3. What bus number should she take?

- a. Bus 969 b. Bus 812

4. How many stops are there?

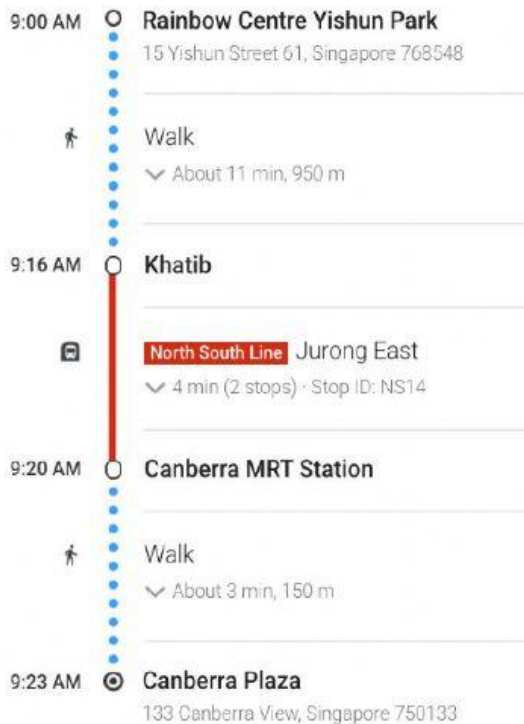
- a. 6 stops b. 10 stops

Name: _____

Date: _____

Google Map

a. Using Google Map, complete the following questions.



Tom needs to go Canberra Plaza for his art class after school.
His school is at Rainbow Centre Yishun Park School

1. Where does Tom needs to go? (Destination)

- a. Northpoint City b. Canberra Plaza

2. Where is Tom from? (Starting point)

- a. Home b. Rainbow Centre Yishun Park School

3. What should he take?

- a. MRT b. Bus

5. What MRT Line should he take?

- a. East West Line b. North South Line

4. How many stops are there?

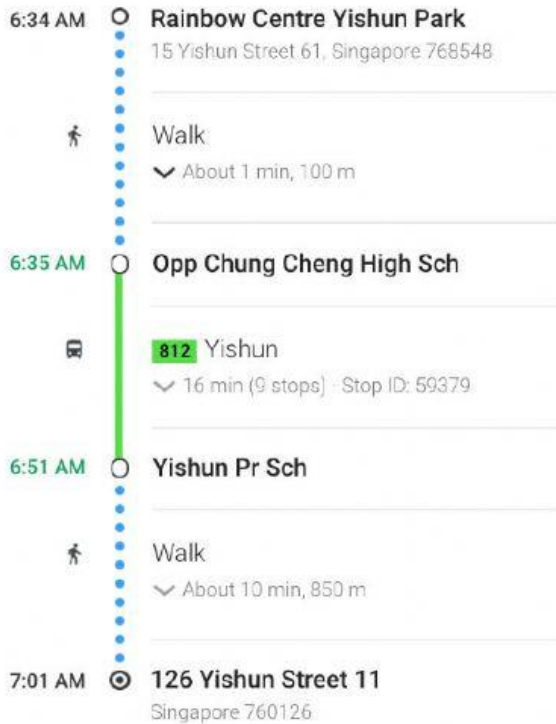
- a. 2 stops b. 6 stops

Name: _____

Date: _____

Google Map

a. Using Google Map, complete the following questions.



Paul is going home on his own after school.
 He is staying at Blk 126 Yishun Street 11.
 His school is at Rainbow Centre Yishun Park School

1. Where does Paul wants to go? (Destination)

- a. Blk 126 Yishun Street 11 b. Wisteria Mall

2. Where is Paul from? (Starting point)

- a. Home b. Rainbow Centre Yishun Park School

3. What bus number should he take?

- a. Bus 969 b. Bus 812

4. How many stops are there?

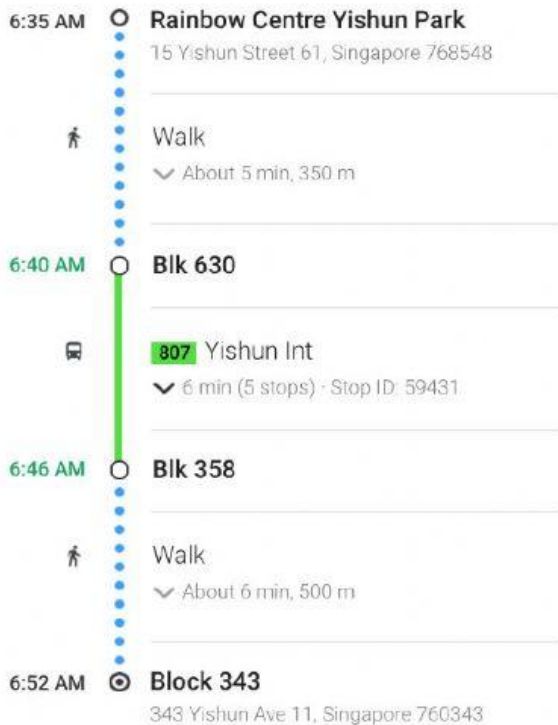
- a. 9 stops b. 15 stops

Name: _____

Date: _____

Google Map

a. Using Google Map, complete the following questions.



Jamie is going home on his own after school.
 She is staying at Blk 343 Yishun Avenue 11.
 Her school is at Rainbow Centre Yishun Park School

1. Where does Jamie wants to go? (Destination)

a. Blk 126 Yishun Street 11 b. Blk 343 Yishun Avenue 11

2. Where is Jamie from? (Starting point)

a. Home b. Rainbow Centre Yishun Park School

3. What bus number should she take?

a. Bus 807 b. Bus 812

4. How many stops are there?

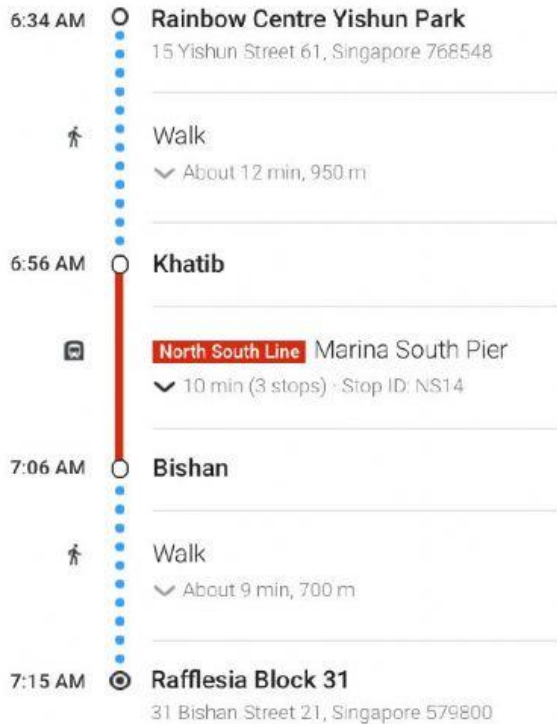
a. 9 stops b. 5 stops

Name: _____

Date: _____

Google Map

a. Using Google Map, complete the following questions.



Laila is going home on his own after school.
She is staying at 31 Bishan Street 21.
Her school is at Rainbow Centre Yishun Park School

- Where does Laila needs to go? (Destination)
 - 31 Bishan Street 21
 - Canberra Plaza
- Where is Laila from? (Starting point)
 - Home
 - Rainbow Centre Yishun Park School
- What should she take?
 - MRT
 - Bus
- What MRT Line should she take?
 - East West Line
 - North South Line
- How many stops are there?
 - 2 stops
 - 3 stops
- Which station should he alight at?
 - Bishan
 - Toa Payoh