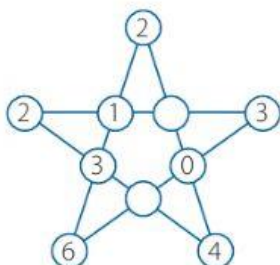


Figuras mágicas

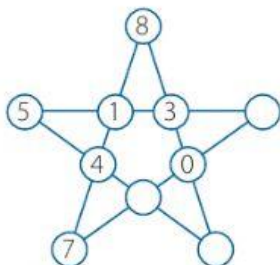
1. **Completa** los números que faltan. Luego, **determina** la suma de cada una de las figuras.

A.



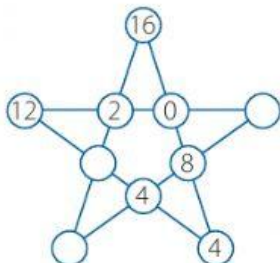
- a. 5 b. 7 c. 8 d. 9

B.



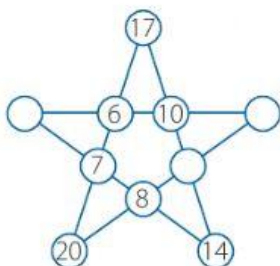
- a. 13 b. 22 c. 17 d. 28

C.



- a. 24 b. 26 c. 28 d. 20

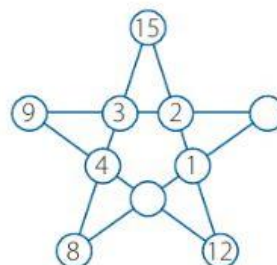
D.



- a. 45 b. 48 c. 43 d. 53

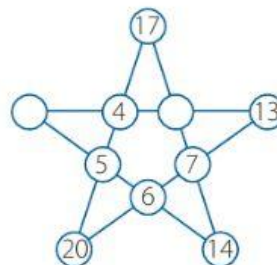
2. **Completa** los números que faltan. Luego, **determina** la diferencia de los números.

A.



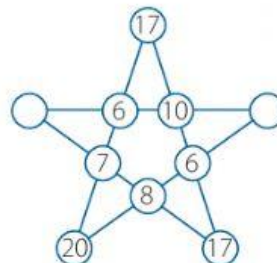
- a. 10 b. 11 c. 12 d. 13

B.



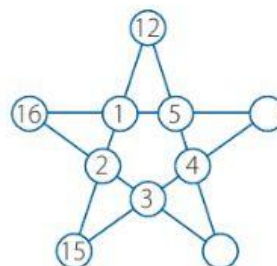
- a. 2 b. 4 c. 6 d. 13

C.



- a. 2 b. 4 c. 5 d. 6

D.



- a. 3 b. 4 c. 1 d. 6