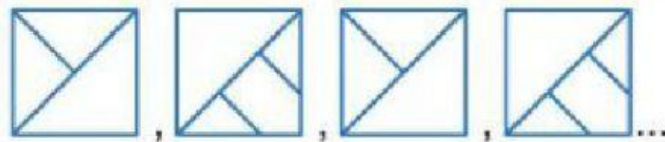


## EVALUACIÓN DE RAZONAMIENTO MATEMÁTICO

1. Indica la figura que sigue.




A)



B)

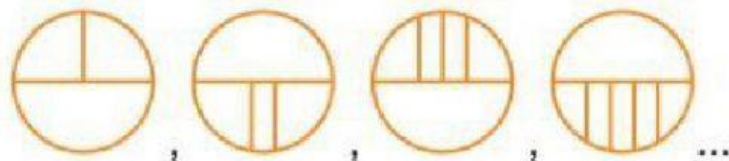


C)



D)

2. Halla la figura que sigue en la sucesión.



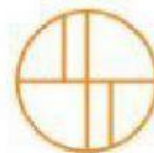
A)



B)

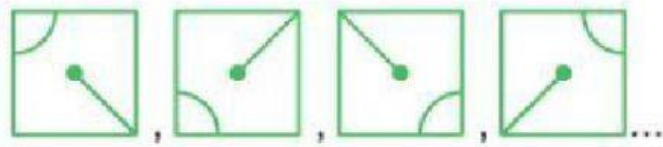


C)



D)

3. Marca la figura que continúa.




A)



B)

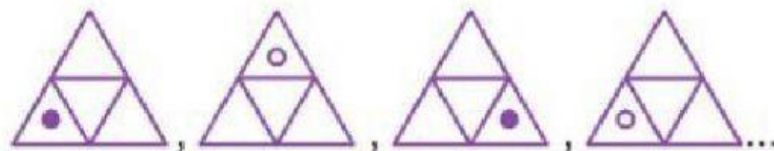


C)

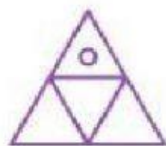


D)

4. Elige el término que sigue en la sucesión.



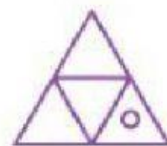
A)



B)

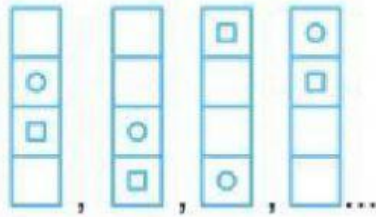


C)



D)

5. Halla la figura que continúa.



A)



B)

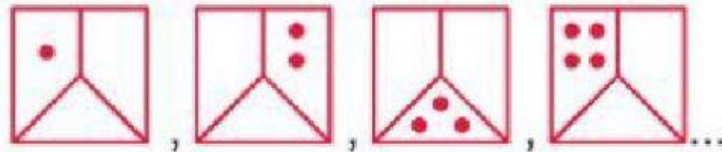


C)



D)

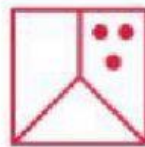
7. Indica la figura que continúa en la sucesión.



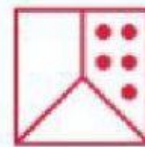
A)



B)

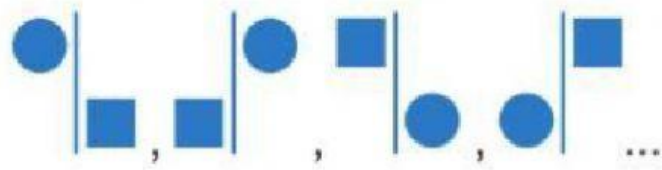


C)



D)

8. Indica la figura que sigue en la sucesión.



A)



B)



C)



D)