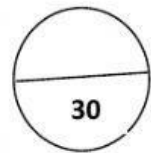


St. Paul's Boys' Anglican School
Third Term Test
Infant Year One



Science Test

Look at the pictures. Choose the correct word to complete the sentence.

1.



nail cutter



shampoo



toothbrush

We wash our hair with _____.



shoe brush



toothbrush



hair brush

We can keep our teeth clean with a _____.

(2 marks)

2. Choose the sense that the girl is using.




smell hear taste (1 mark)

3. Choose the sense that the girl is using.




smell taste touch (1 mark)

4. Which are the things that you can hear? (2 marks)




5. Which are the unhealthy foods?


(4 marks)




banana




chocolate




apple



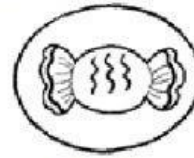
donut



pumpkin



chips



sweet

6. Choose the correct cloud.

(1 mark)

A habitat is a place where plants and animals live.




7. Which two animals are found in the land habitat.


(2 marks)




Rabbit



Dolphin




Fish



Tiger

8. Which two animals are found in a water habitat.

(2 marks)



elephant



octopus



frog



zebra

8. Put in one word to complete the sentence. (1 mark)

two

four

There are _____ seasons in Trinidad and Tobago.

9. The boy would fly his kite on a _____ and _____

day.

windy

(2 marks)



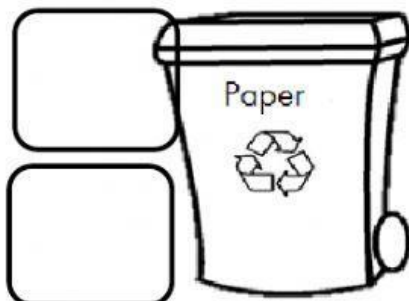
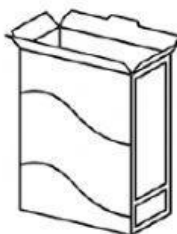
sunny

rainy

10. Choose the symbols that says that items can be recycled. (1 mark)



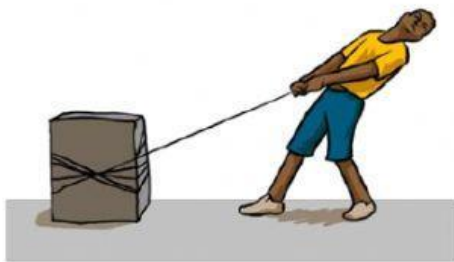
11. Look at the items below. Which items go into the correct recycle bin?



(4 marks)

12. Name the force used in the picture.

(2 marks)



13. The iron



changes electrical energy



to:

a. Heat energy



b. Sound energy.



(1 mark)

Choose the simple machines below.

(4 marks)

