

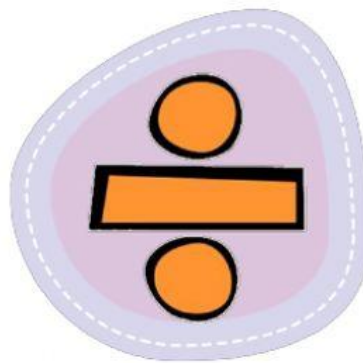


# OPERASI TAMBAH



?? Pilih operasi tambah.



Jawab soalan yang diberi.

Bahan  
Pendidikan



+



4

1



+



4

2



+



4

3



Kira dan isi tempat kosong.



3 pink flowers + 1 pink flower =

○ ○ ○

2 alarm clocks + 5 alarm clocks =

○ ○ ○ ○ ○

6 red crayons + 3 red crayons =

○ ○ ○ ○ ○ ○

Kira menggunakan jari.



4