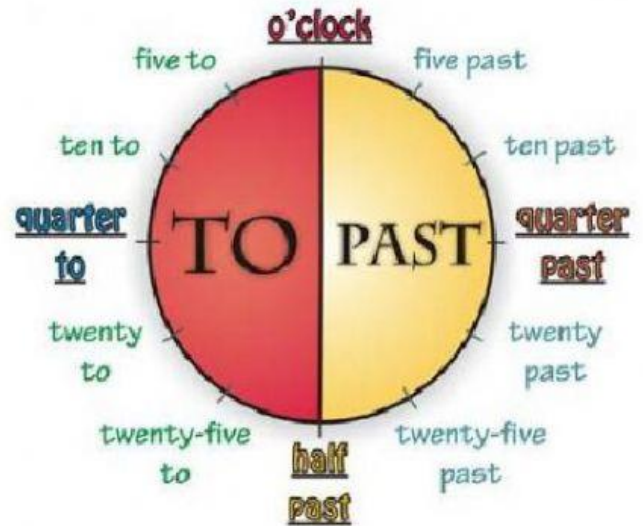




Read and drag the correct time.

8:50	3:10	7:20	10:45	10:30
------	------	------	-------	-------

1. It's half past ten
2. It's ten to nine
3. It's twenty past seven
4. It's ten past three
5. It's a quarter to eleven

Read and match.



- It's half past one.
- It's four o'clock.
- It's half past two.
- It's half past eleven.
- It's **six** o'clock.
- It's two o'clock.

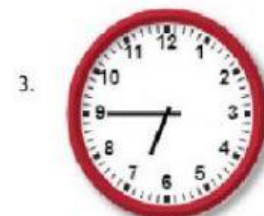
What time is it? Look at the clocks and write the correct hour.



\_\_\_\_\_



\_\_\_\_\_




\_\_\_\_\_



\_\_\_\_\_



\_\_\_\_\_



\_\_\_\_\_