

ESCOLA: _____

ALUNO(A): _____ DATA: ____/____/____

PROFESSORA: _____

LEIA, OBSERVE A IMAGEM .

A centena

1 unidade



1 *dezena*

São 10 unidades.



1 *centena*

São ____ unidades.

São ____ dezenas.

$10 + 10 + 10 + 10 + 10 + 10 + 10 + 10 + 10 + 10 + 10$

90 + 10 = 100

90 + ____ = 100

100 - 10 = ____

100 = ____ centena

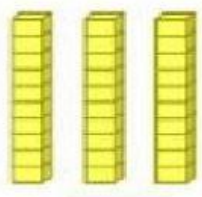

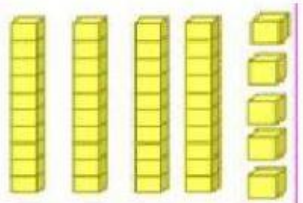

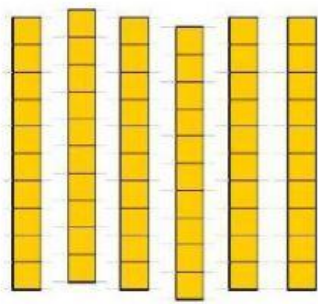
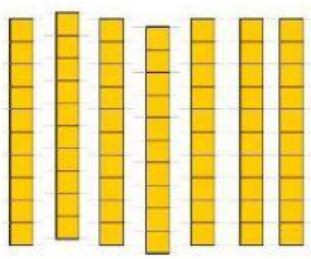
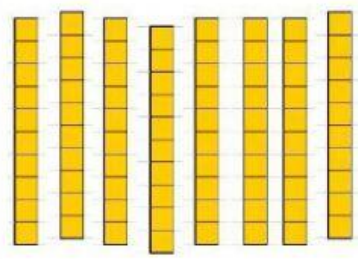
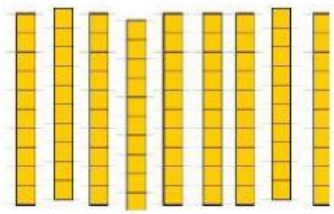

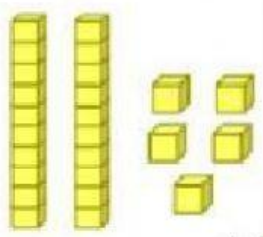
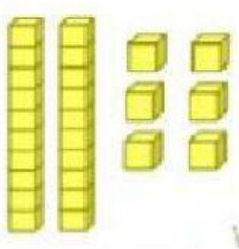
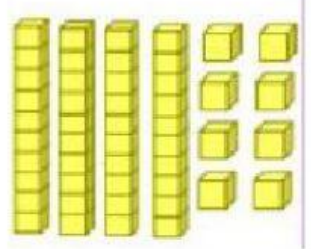
100 = ____ dezenas

CENTENA	DEZENA	UNIDADE












1 *centena* = 10 dezenas = 100 unidades

1) COMPLETE OS ESPAÇOS COM O VALOR REPRESENTADO PELO MATERIAL DOURADO.

 <input type="text"/>	 <input type="text"/>	 <input type="text"/>
 <input type="text"/>	 <input type="text"/>	 <input type="text"/>
 <input type="text"/>	 <input type="text"/>	 <input type="text"/>
 <input type="text"/>	 <input type="text"/>	 <input type="text"/>

A FESTA JUNINA É UMA TRADICIONAL FESTIVIDADE POPULAR QUE ACONTECE DURANTE O MÊS DE JUNHO.

2) COMPLETE AS PALAVRAS:

 <div> <div></div> <div></div> <div>A</div> <div></div> <div>E</div> <div>U</div> </div>	 <div> <div></div> <div>O</div> <div></div> <div>U</div> <div>E</div> <div>I</div> <div></div> <div>A</div> </div>	 <div> <div></div> <div>I</div> <div></div> <div>O</div> <div></div> <div>A</div> </div>
 <div> <div></div> <div>I</div> <div></div> <div></div> <div>O</div> </div>	 <div> <div></div> <div>A</div> <div></div> <div>Ã</div> <div>O</div> </div>	 <div> <div></div> <div>A</div> <div>N</div> <div></div> <div>E</div> <div>I</div> <div></div> <div>A</div> </div>
 <div> <div></div> <div>A</div> <div></div> <div></div> <div>A</div> <div></div> <div>A</div> </div>	 <div> <div></div> <div>O</div> <div></div> <div></div> <div>O</div> </div>	 <div> <div></div> <div>A</div> <div>N</div> <div></div> <div>I</div> <div></div> <div>A</div> </div>

3) NO SEU CADERNO ESCREVA: O CABEÇALHO, PULE UMA LINHA, ESCREVA ATIVIDADE, PULE OUTRA LINHA E ESCREVA:

1) ESCREVA DE 0 ATÉ 50: