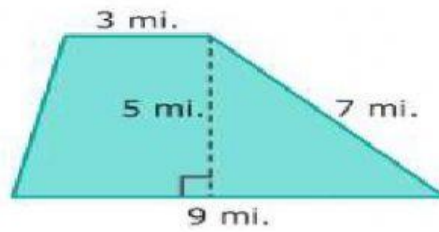
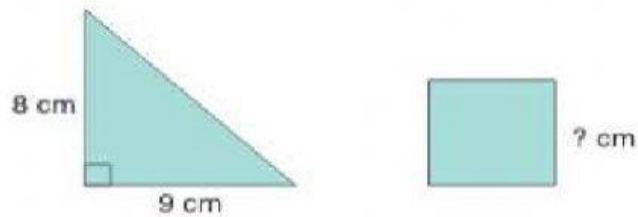


What is the area of the trapezoid?



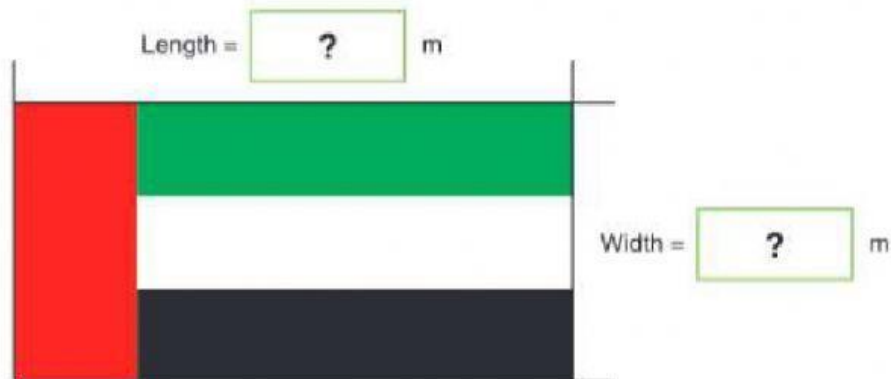
- A) 24 mi²
- B) 30 mi²
- C) 34 mi²
- D) 44 mi²

This square and a triangle have the same area.



What is the length of one side of the square? cm

The largest UAE flag has an area of 800 m^2 .
Its width is half its length.
What are its measurements?



A rectangular balcony has an area of 28 square meters. Its perimeter is 22 meters. What are the dimensions of the balcony?

- A) 7 meters by 4 meters
- B) 14 meters by 2 meters
- C) 11 meters by 2 meters
- D) 10 meters by 1 meter

