

NOME: _____

DATA: ____/____/____

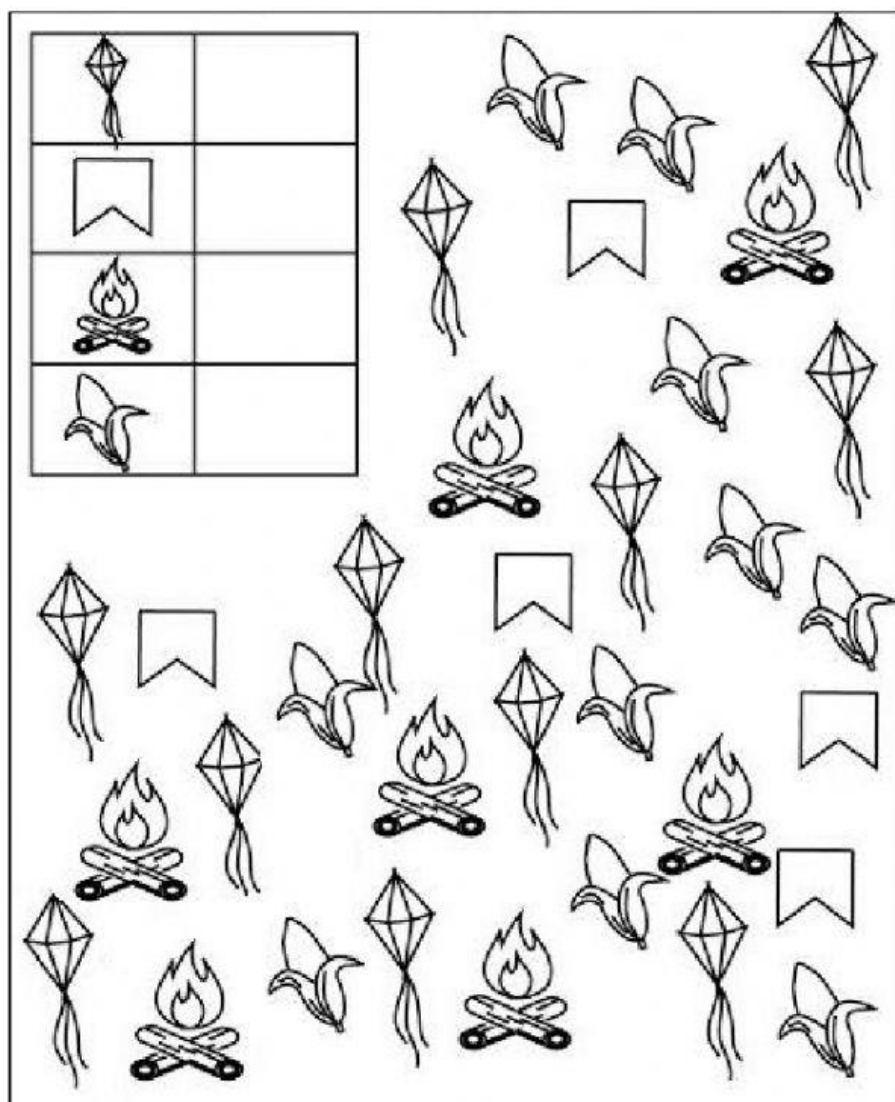


LEVE CADA FIGURA AO SEU RESPECTIVO NOME.

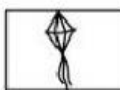



| | | |
|--|---|---|
|  FOGUEIRA |  BANDEIRINHA |  BALÃO |
|  MILHO |  CANJICA |  PIPOCA |

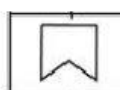
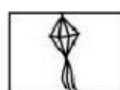

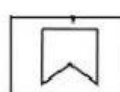


CONTE O NÚMERO DE FIGURAS QUE ESTÃO EM DESTAQUE E PREENCHA O QUADRINHO COM A QUANTIDADE CORRESPONDENTE DE CADA UMA.



AGORA , DE ACORDO COM AS QUANTIDADES ENCONTRADAS NA ATIVIDADE ACIMA. REALIZE A SOMA DAS FIGURAS ABAIXO.

| | | | | |
|---|---|---|---|----------------------|
|  | + |  | = | <input type="text"/> |
|  | + |  | = | <input type="text"/> |

| | | | | |
|---|---|---|---|----------------------|
|  | + |  | = | <input type="text"/> |
|  | + |  | = | <input type="text"/> |