

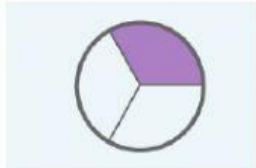
Arahan: Padankan pecahan kawasan berlorek dengan nilai pecahan yang betul.



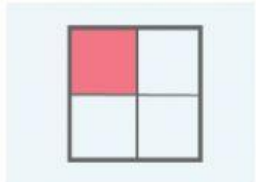
$$\frac{1}{4}$$



$$\frac{1}{3}$$



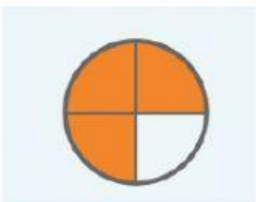
$$\frac{1}{2}$$



$$\frac{6}{12}$$



$$\frac{1}{4}$$



$$\frac{2}{4}$$



$$\frac{1}{5}$$



$$\frac{3}{4}$$