


Date:

# The Importance of Parts of the Body

Fill in the blanks with the correct answers.



buffalo



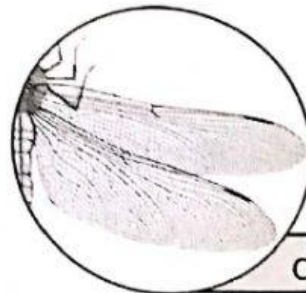
rhinoceros

a) Horns help these animals to

\_\_\_\_\_.



bird



dragonfly

b) Wings help these animals to

\_\_\_\_\_.



fish



frog


c) Fins and webbed feet help these animals to

\_\_\_\_\_.

# Different Yet Similar

These animals are classified according to the similar parts of their body.

**Group A**



**Group B**



State the similar parts of the body for each group.

**Group A**

**Group B**

Name other animals that have similar parts of the body with:

**Group A**

**Group B**

5.1.3



Teacher's Info

- Pupil's should provide more than one answer

Textbook  
Pages:  
46-47

31