


Mathematics

Subtraction Review


Complete the following problems.

1.) $10 - 7 = \boxed{}$ 

2.) $6 - 1 = \boxed{}$ 

3.) $3 - 2 = \boxed{}$ 


4.) $8 - 4 = \boxed{}$ 

5.) $2 - 2 = \boxed{}$ 

Write the number sentence and complete.


- 6.) There are 9 ducks on the grass. 4 ducks walked away. How many ducks are left?

$$\bigcirc - \bigcirc = \bigcirc$$



- 7.) Marsha bought 5 puppies. She gave 3 puppies to her friend Jake. How many puppies does she have left?

$$\bigcirc - \bigcirc = \bigcirc$$



- 8.) There are 7 balloons. 6 balloons popped. How many balloons are left?

$$\bigcirc - \bigcirc = \bigcirc$$

