

One More



Name: _____

Grade: _____

Use this number line to help you find **one more** than the given number.

- One more than 1

- One more than 4




- One more than 9

- One more than 0

- One more than 2

- One more than 7

Choose the number that is **one more** than the number of animals.

	9	2	4
	4	6	5
	2	0	8