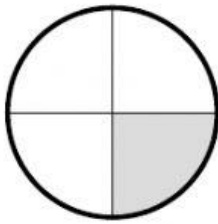


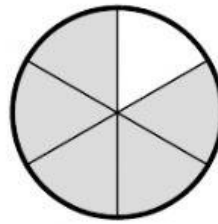
Écris la fraction qui représente la partie ombrée.

(1)



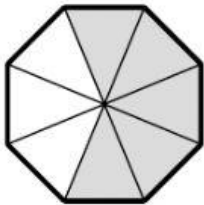
=

(6)




=

(2)



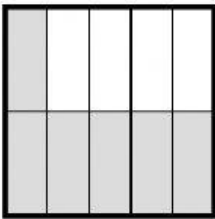
=

(7)



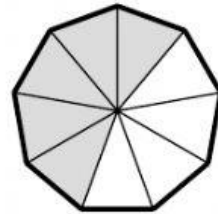
=

(3)




=

(8)




=

(4)



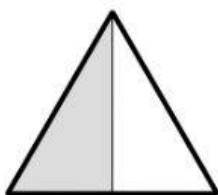
=

(9)




=

(5)



=

(10)



=

---