

## Term 3 – Social Studies

A. Select 3 types of transportation for each group.



Sea Transport	Land Transport	Air Transport

(9)

B. Select the correct answer to the questions below.

1. When is Independence celebrated in Trinidad and Tobago?
  - a. August 31<sup>st</sup>
  - b. September 24<sup>th</sup>
  - c. December 25<sup>th</sup>
  
2. What holiday is celebrated on January 1<sup>st</sup> every year?
  - a. Mother's Day
  - b. New Year's Day
  - c. Divali

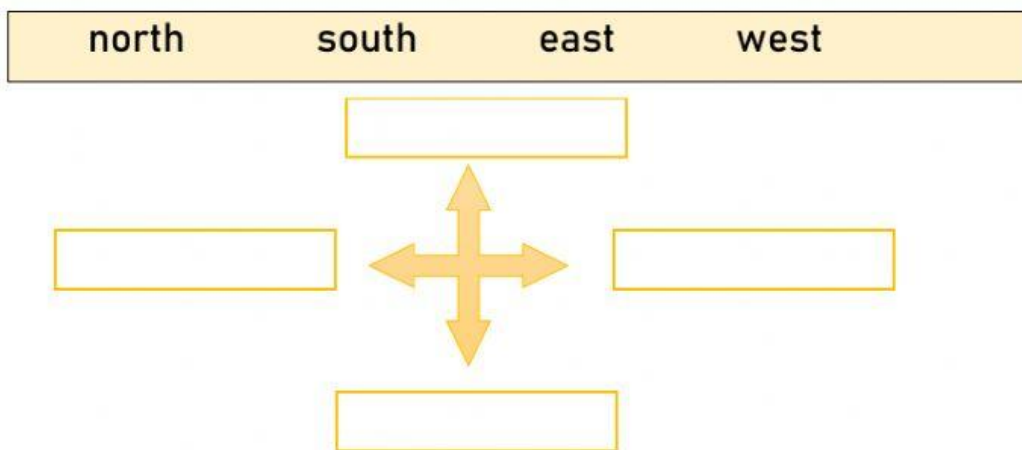
3. Which religious community celebrates Eid-ul-Fitr?

- a. Christians
- b. Hindus
- c. Muslims

4. What national holiday is celebrated on September 24<sup>th</sup>?

- a. Easter
- b. Republic Day
- c. Spiritual Shouter Baptist Liberation Day (4)

C. Label the cardinal points below.



(4)

D. Use the picture to fill in the blanks in each sentence below.



- a. \_\_\_\_\_ is south of David.
- b. Betty is on the \_\_\_\_\_ and Sam is on the \_\_\_\_\_.
- c. \_\_\_\_\_ is north of the tree. (4)

E. Select the qualities of a hero.


- |          |               |          |              |      |
|----------|---------------|----------|--------------|------|
| helpful  | disrespectful | careless | strong       | kind |
| fearless | disobedient   | honest   | good manners | (5)  |


F. List two community heroes. \_\_\_\_\_

\_\_\_\_\_ (2)

G. Label the pictures below.

urban community                      rural community






(2)

H. Select the characteristics of each type of community.

busy            open fields            tall buildings            crowded  
 quiet            spacious

Rural Communities	Urban Communities

(3)

I. Match each picture with the appropriate type of weather.

(7)



○



○



○



○



○



○



○