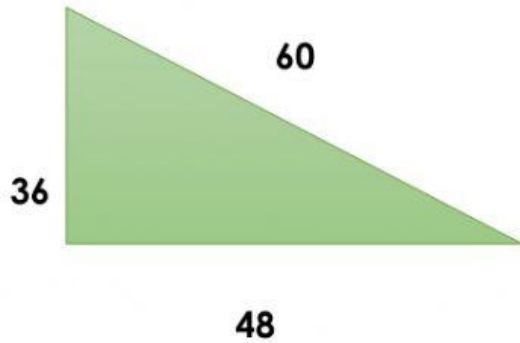
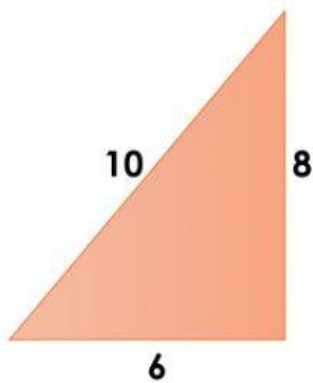


MEDIDAS DE UN TRIANGULO RECTANGULO

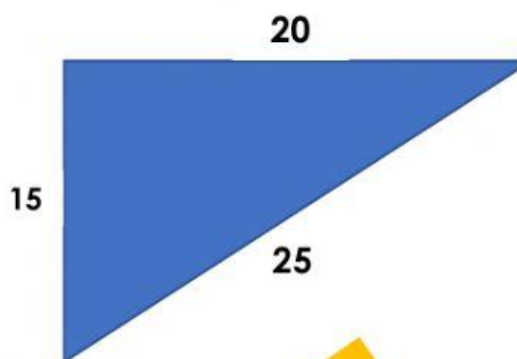
OBSERVAR LOS TRIANGULOS RECTANGULOS Y SELECCIONA LAS MEDIDAS QUE INDICA.



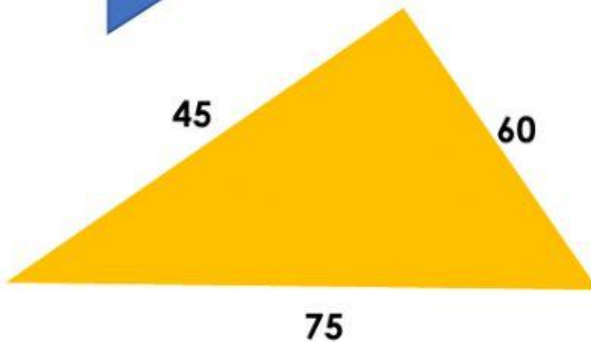
CATETO
CATETO
HIPOTENUSA



CATETO
CATETO
HIPOTENUSA



CATETO
CATETO
HIPOTENUSA



CATETO
CATETO
HIPOTENUSA

