

**First Year Infants**  
**Term 3**  
**Evaluation**  
**2021**


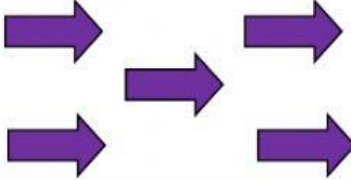



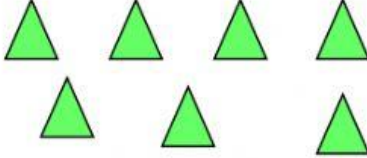
**Mathematics**




**Name:** \_\_\_\_\_


**Date:** \_\_\_\_\_

1) Complete the table below

Amount	Numeral	Word Name
	1	one
		
		
		
		
		


2) Instructions: Look at the pictures carefully. Fill in the blank with the position the pictures are in 1<sup>st</sup>, 2<sup>nd</sup>, 3<sup>rd</sup>, 4<sup>th</sup> or 5<sup>th</sup>.




1) The dog  is in \_\_\_\_\_ position.

2) The baby  is in \_\_\_\_\_ position.

3) The cat  is in \_\_\_\_\_ position.

4) The girl  is in \_\_\_\_\_ position.

5) The boy  is in \_\_\_\_\_ position.

**3) Instructions: Write the value of the money on the line provided.**

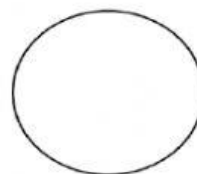


**4) Write the missing numerals.**

7    \_\_\_\_\_    \_\_\_\_\_    \_\_\_\_\_    3    2    \_\_\_\_\_    \_\_\_\_\_

**5) Match the shapes with its name.**

**Square**



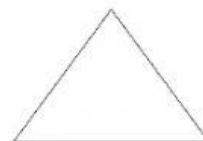
**Triangle**



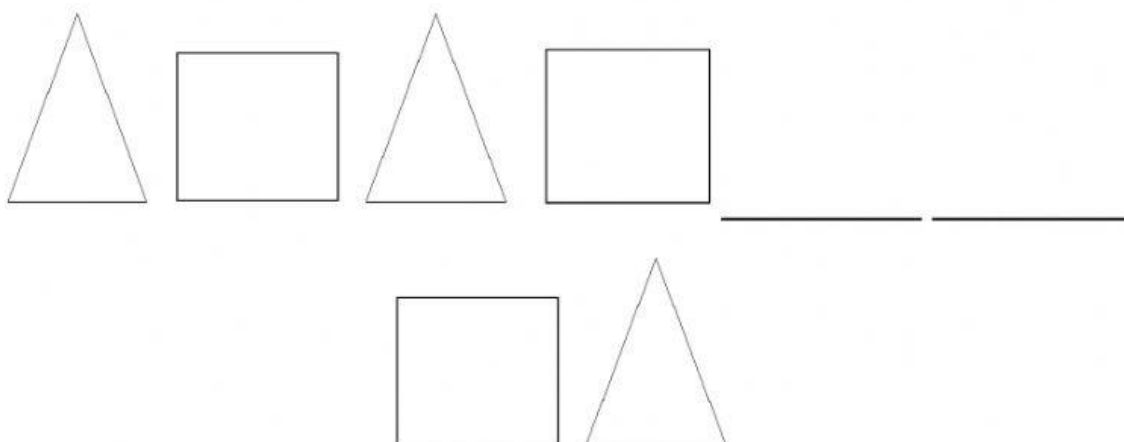
**Rectangle**




**Circle**




**6) Complete the pattern.**



**7) Place a star under the taller tree.**



\_\_\_\_\_



\_\_\_\_\_

8) Look at the pictures carefully and answer the questions provided.



**Item 1**

**\$6.00**



**Item 2**

**\$4.00**



**Item 3**

**\$3.00**



**Item 4**

**\$1.00**

- 1) If I had \$5.00, what items could I buy? \_\_\_\_\_
- 2) Which item cost less than \$2.00? \_\_\_\_\_
- 3) Which two items when added together cost \$10.00?  
\_\_\_\_\_
- 4) Which item cost the most amount of money? \_\_\_\_\_