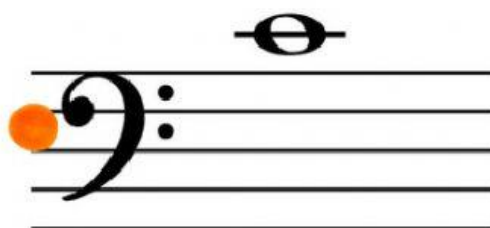



Name: _____

MATCH THE NOTE TO ITS CORRECT NAME.


Middle C
in the Treble Clef




Middle C
in the Bass Clef



G





MATCH THE SCALE TO ITS CORRECT KEY SIGNATURE.

C Major



F Major



G Major

