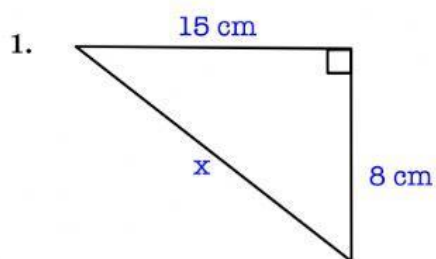
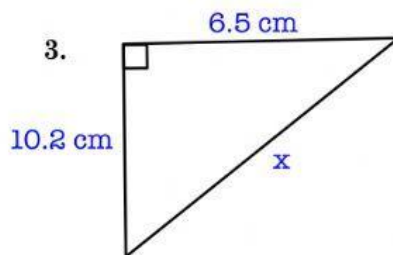


Name: _____ Date: _____

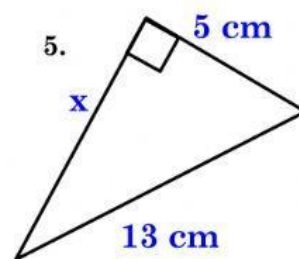
Find the length of the side marked x .



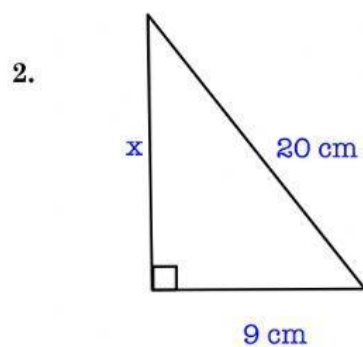
Answer: $x =$ _____ cm.



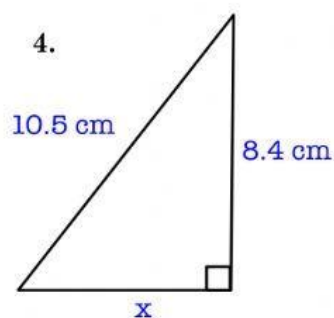
Answer: $x =$ _____ cm.



Answer: $x =$ _____ cm.



Answer: $x =$ _____ cm.



Answer: $x =$ _____ cm.