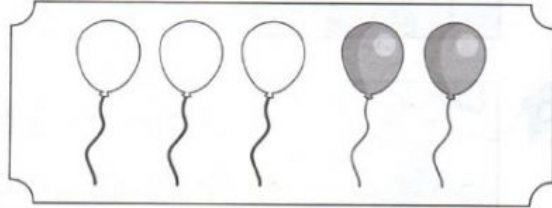



RECOGNISE ADDITION

Fill in the blank.


a 3 and 2 make .




b 3 add 3 is .




c The sum of 5 and 4 is .



d 1 more than 6 is .



e There are deer altogether.



1 Write the symbols $+$ and $=$.

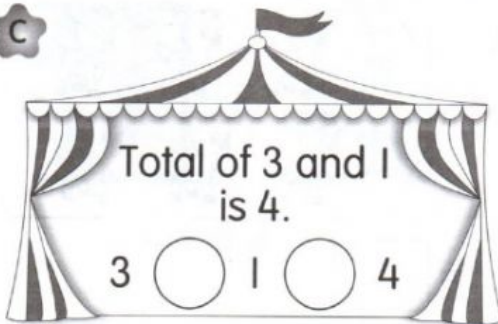
a




b



c



d



2 Write the number sentence.

a

3 and 5 make 8.

3	+	5	=	8
---	---	---	---	---

b

3 add 4 is 7.

	+		=	
--	---	--	---	--

c

4 more than 2 is 6.

	+		=	
--	---	--	---	--

d


Total of 2 and 7 is 9.

	+		=	
--	---	--	---	--



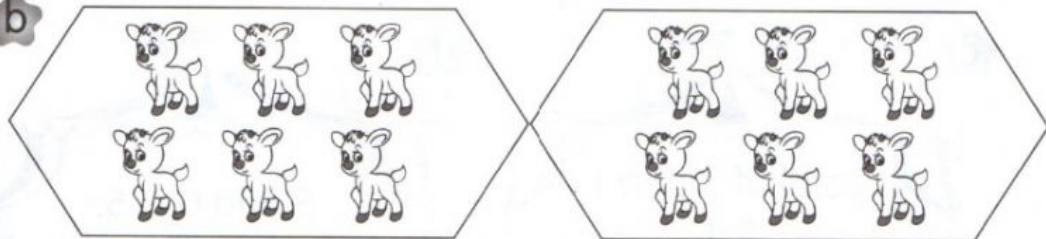
Complete the number sentence.

a




$$2 + 9 = \square$$

b



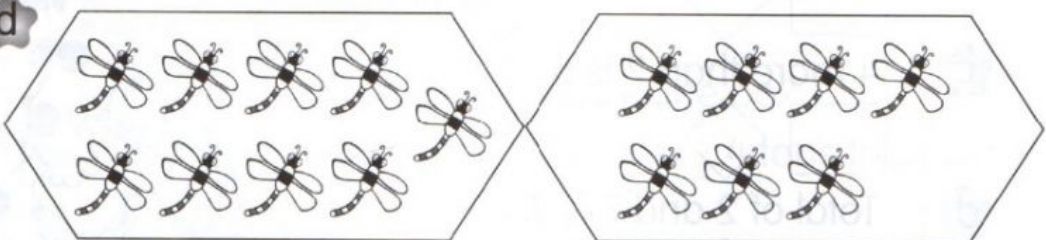
$$6 + \square = \square$$

c



$$\square + 8 = \square$$

d



$$\square + \square = \square$$

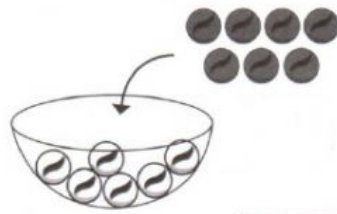
Complete the number sentence.

a



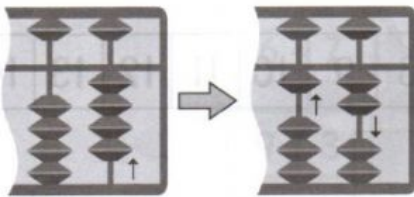
$$7 + 4 = \square$$

b



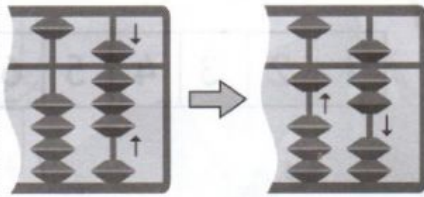
$$6 + 7 = \square$$

c



$$4 + 8 = \square$$

d




$$8 + 9 = \square$$

e



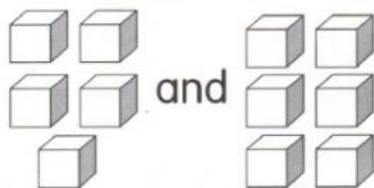
$$9 + \square = \square$$

f



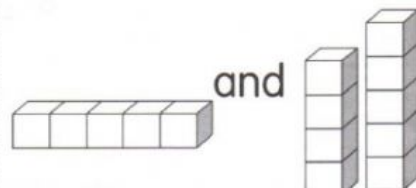
$$\square + 8 = \square$$

g



$$\square + \square = \square$$

h



$$\square + \square = \square$$

Choose the correct number sentence. You may choose more than one number sentence.

