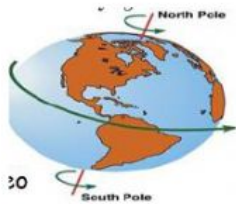
	2nd SEMESTER FINAL EXAMINATION PAPER ACADEMIC YEAR 2020/2021	
	Subject : Science	Name :
	Primary : 2	Day/ Date :

SECTION A

Multiple-choice Questions (15 Marks)

1. Look at the picture below.



The movement of the earth to spin on its own axis we call...

- a. Revolution
- b. orbit
- c. rotation

2. How long is the movement of the earth spin on its own axis?

- a. 24 hours
- b. 365 hours
- c. 20 hours

3. What can you see during night time?

- a. Moon and sun
- b. Star and moon
- c. Star and sun

4. What activity that you can do in night time?

- a. Sleep
- b. going to school
- c. breakfast

5. Look at the picture.



When do you think this happen?

- a. Night time
- b. noon
- c. In the morning

6. Match the shape of magnet with their name.

U-Shaped magnet



Bar magnet



Cylindrical magnet



7. Magnet has ____ poles

a. 4

b. 2

c. 3

8. Which thing that will be attracted by the magnet?

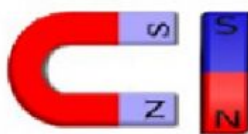
a. Iron nail

b. tissue

c. wood spoon

9. Write 'repel' or 'attract' in the box below based on the pictures.

10.





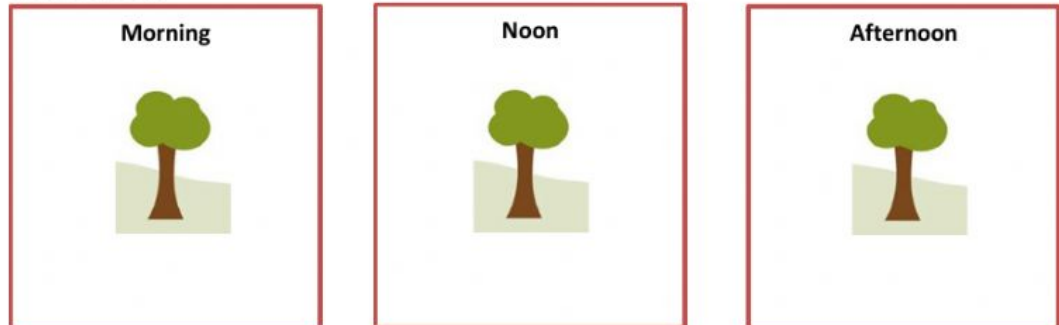


II. Fill the words in the blank

1. The sun rises in the
2. Rotation is the movement of the earth that spin on its own
3. When magnet pull each other we call it
4. Magnet can attract the material that made of
5. When south pole meet the South pole, the magnet will be

III. Critical thinking Questions (___ MARKS)

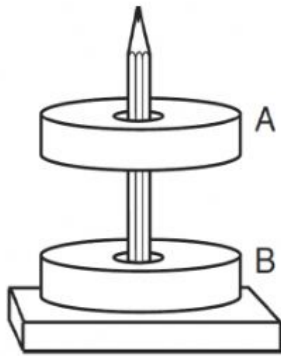
1. Please draw the shadow of the tree in the morning, noon and afternoon.



2. From your pictures in questions number 2, Please answer these questions
 - a. Which picture has the shortest shadow? Why?

b. Which picture has the longest shadow? Why?

3. Look at the picture below.



a. What happen with these two magnet?

b. Please write two possibilities of the pole in point A and B.

4. Look at the pictures below.



a. Which things that will be attracted by the magnet? Why?

b. Which things that will not be attracted by the magnet? Why?