

Monday 7<sup>th</sup> June 2021

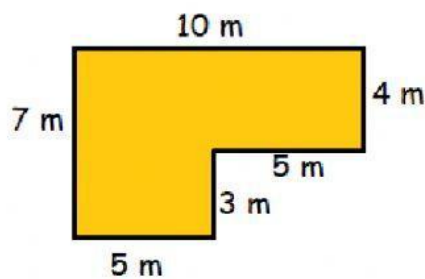
Finding the area of compound shapes

Remember compound shapes are made up of more than one rectangle or square. You can find their areas by cutting them into simple shapes, find the area of the simple shapes and add them up to get the total area of the compound shape.

Find the area of the following compound shapes.

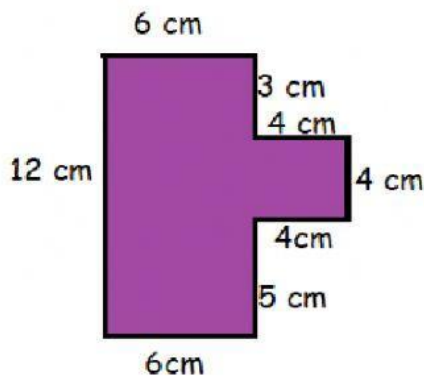
Do the working in your copybooks and type your answer in the box provided on the right.

1.



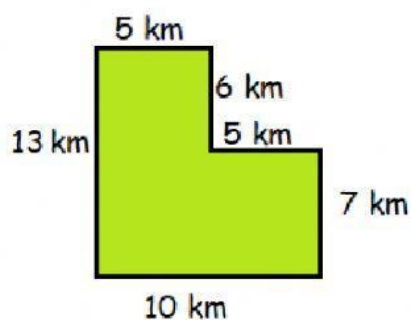
Area = \_\_\_\_\_ m<sup>2</sup>

2.



Area = \_\_\_\_\_ cm<sup>2</sup>

3.



Area = \_\_\_\_\_ km<sup>2</sup>