


Realizar los siguientes ejercicios .

1)



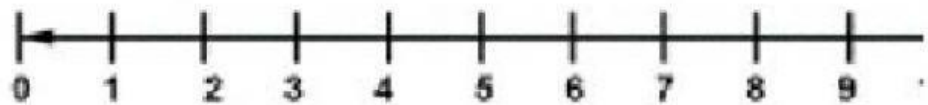
$$4 + 2 =$$

2)



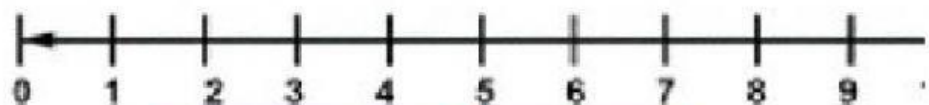
$$5 + 4 =$$

3)



$$3 + 0 =$$

4)



$$7 + 1 =$$