

NAME :

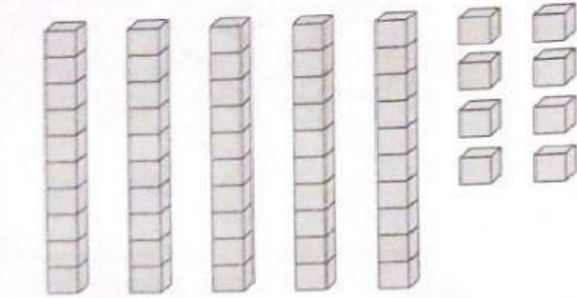
1 SENTHAMIL

Recognise Place Value and Digit Value

Textbook Vol. 1 PP. 25 - 27


A. Fill in the blanks. LSI.6.1

EXAMPLE




5 tens 8 ones = 58

1.



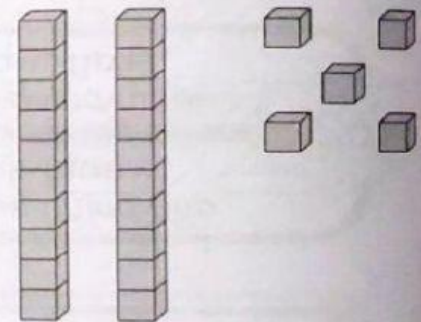
tens ones =

2.



tens ones =

3.



tens ones =

B. Write the place value and digit value of the underlined digit. LSI.6.1

	Number	Place value	Digit value
1.	<u>7</u> 5	<input type="text"/>	<input type="text"/>
2.	4 <u>5</u>	<input type="text"/>	<input type="text"/>

	Number	Place value	Digit value
3.	<u>9</u> 3	<input type="text"/>	<input type="text"/>
4.	8 <u>2</u>	<input type="text"/>	<input type="text"/>