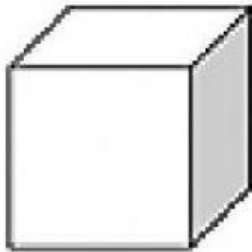


## MATHEMATICS: 3D Shapes

**Instructions:** Fill in the blanks




I am a \_\_\_\_\_,

I have \_\_\_\_\_ equal sides.



I am a \_\_\_\_\_,

I have \_\_\_\_\_ flat faces and  
one \_\_\_\_\_ face.




I am a \_\_\_\_\_,

I have \_\_\_\_\_ sides.



I am a \_\_\_\_\_,

I have \_\_\_\_\_ flat face and  
one \_\_\_\_\_ face .



I am a \_\_\_\_\_,

I am a \_\_\_\_\_ shape.