










Look at the pictograph and answer the questions below.

Fruits Collected

Apple					
Mango					
Pear					
Watermelon					

- 1.) How many fruits are collected altogether? _____
- 2.) _____ watermelons were collected.
- 3.) The most fruits collected were _____.
- 4.) The fewest fruit collected was _____.
- 5.) _____ apple and pear were collected altogether.