
















NOME: _____



FAZ OS CÁLCULOS DE ADIÇÃO SUBSTITUINDO
OS DESENHOS POR SEUS VALORES:



								
1	2	3	4	5	6	7	8	9



	+		
$\underline{\quad\quad} + \underline{\quad\quad} = \underline{\quad\quad}$			



	+		
$\underline{\quad\quad} + \underline{\quad\quad} = \underline{\quad\quad}$			



	+		
$\underline{\quad\quad} + \underline{\quad\quad} = \underline{\quad\quad}$			

	+		
$\underline{\quad\quad} + \underline{\quad\quad} = \underline{\quad\quad}$			

	+		
$\underline{\quad\quad} + \underline{\quad\quad} = \underline{\quad\quad}$			

	+		
$\underline{\quad\quad} + \underline{\quad\quad} = \underline{\quad\quad}$			

	+		
$\underline{\quad\quad} + \underline{\quad\quad} = \underline{\quad\quad}$			

	+		
$\underline{\quad\quad} + \underline{\quad\quad} = \underline{\quad\quad}$			