







Division




Divide 4 glasses of milk between 2 kids. How many does each get?

 \div  $=$ 

Divide 6 glasses of milk between 3 kids. How many does each get?

 \div  $=$ 

Divide 3 glasses of milk between 1 kid. How many does he get?

 \div  $=$ 

Can you solve this high level division problem?

 \div  $=$ 